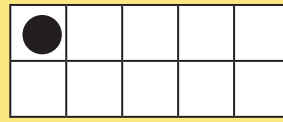

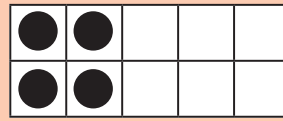
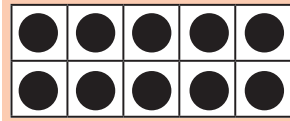


Zehnerunterschreitung Zahlenraum 20

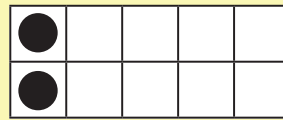
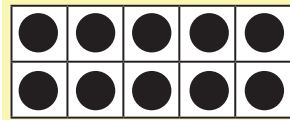
Streiche Punkte und löse die Rechenaufgaben!



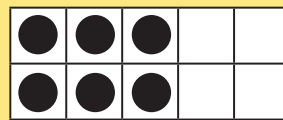
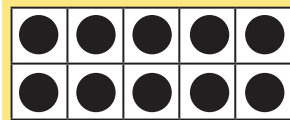
$11 - 2 = \underline{\quad}$



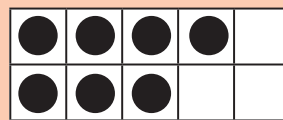
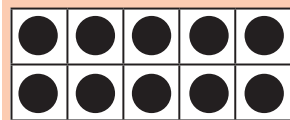
$14 - 5 = \underline{\quad}$



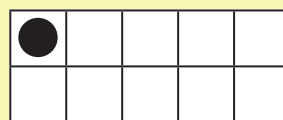
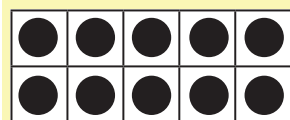
$12 - 5 = \underline{\quad}$



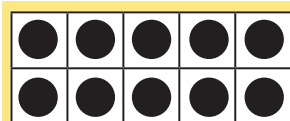
$16 - 8 = \underline{\quad}$



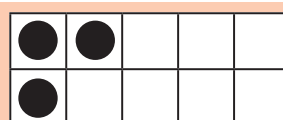
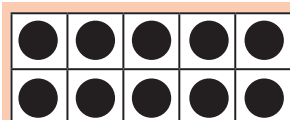
$17 - 9 = \underline{\quad}$



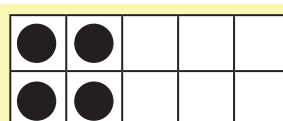
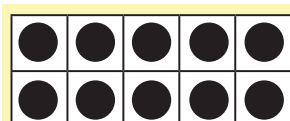
$11 - 4 = \underline{\quad}$



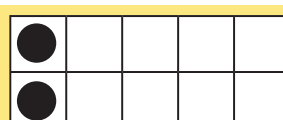
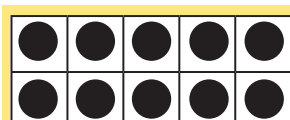
$12 - 6 = \underline{\quad}$



$13 - 3 = \underline{\quad}$



$14 - 7 = \underline{\quad}$



$12 - 4 = \underline{\quad}$