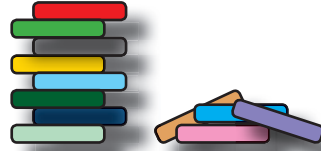


# Unter den Zehner



Tina baut mit 12 Bauklötzen einen Turm.

12



4 davon fallen ihr hinunter.

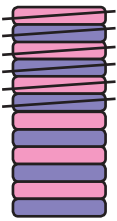
- 4

Wie viele Bauklötze hat der Turm jetzt?

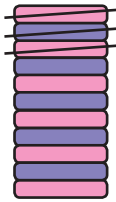
= 8



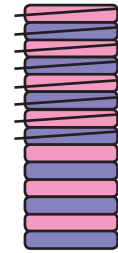
Sprich laut und rechne.



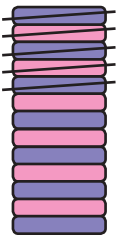
$12 - 6 = \underline{\quad}$



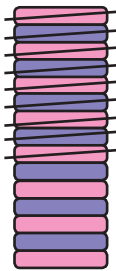
$11 - 3 = \underline{\quad}$




$14 - 8 = \underline{\quad}$



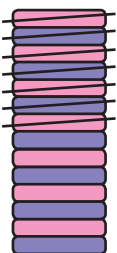
$13 - 5 = \underline{\quad}$



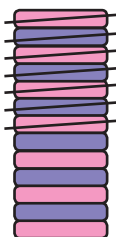
$15 - 9 = \underline{\quad}$



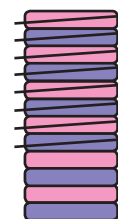
$12 - 3 = \underline{\quad}$



$15 - 7 = \underline{\quad}$



$13 - 6 = \underline{\quad}$



$11 - 8 = \underline{\quad}$