


Übungen bis 9


Fülle die Zeilen:

9		9
9		9
9		9


Schreibe die passenden Rechensätzchen auf:




$8 + 1 = \underline{\quad}$




$5 + \underline{\quad} = \underline{\quad}$




$\underline{\quad} + \underline{\quad} = \underline{\quad}$




$\underline{\quad} + \underline{\quad} = \underline{\quad}$




$\underline{\quad} + \underline{\quad} = \underline{\quad}$



$\underline{\quad} + \underline{\quad} = \underline{\quad}$



$\underline{\quad} + \underline{\quad} = \underline{\quad}$



$\underline{\quad} + \underline{\quad} = \underline{\quad}$



Rechne:

$2 + 7 = \underline{\quad}$
$4 + 5 = \underline{\quad}$
$8 + 1 = \underline{\quad}$
$7 + 2 = \underline{\quad}$
$1 + 8 = \underline{\quad}$

$3 + 6 = \underline{\quad}$
$5 + 4 = \underline{\quad}$
$0 + 9 = \underline{\quad}$
$6 + 3 = \underline{\quad}$
$9 + 0 = \underline{\quad}$

$9 - 0 = \underline{\quad}$
$9 - 1 = \underline{\quad}$
$9 - 2 = \underline{\quad}$
$9 - 3 = \underline{\quad}$
$9 - 4 = \underline{\quad}$

$9 - 5 = \underline{\quad}$
$9 - 6 = \underline{\quad}$
$9 - 7 = \underline{\quad}$
$9 - 8 = \underline{\quad}$
$9 - 9 = \underline{\quad}$