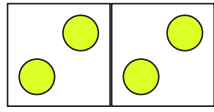
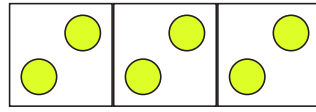


Malrechnen Zahlenraum 20



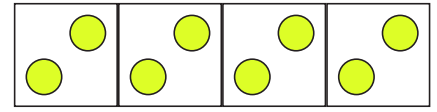
$2 + 2 = \underline{\quad}$

$2 \times 2 = \underline{\quad}$



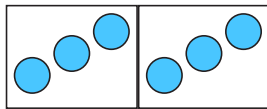
$2 + 2 + 2 = \underline{\quad}$

$3 \times 2 = \underline{\quad}$



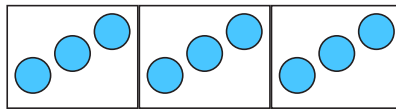
$2 + 2 + 2 + 2 = \underline{\quad}$

$4 \times 2 = \underline{\quad}$



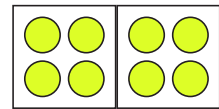
$3 + 3 = \underline{\quad}$

$2 \times 3 = \underline{\quad}$



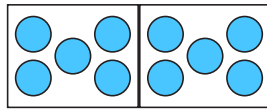
$3 + 3 + 3 = \underline{\quad}$

$3 \times 3 = \underline{\quad}$



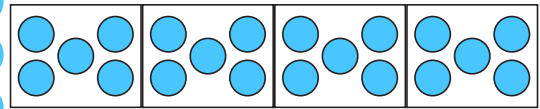
$4 + 4 = \underline{\quad}$

$2 \times 4 = \underline{\quad}$



$5 + 5 = \underline{\quad}$


$2 \times 5 = \underline{\quad}$



$5 + 5 + 5 + 5 = \underline{\quad}$

$4 \times 5 = \underline{\quad}$

Löse die Rechenaufgaben!



$2 + 2 = \underline{\quad}$

$2 \times 2 = \underline{\quad}$

$4 + 4 = \underline{\quad}$

$2 \times 4 = \underline{\quad}$

$1 + 1 = \underline{\quad}$

$2 \times 1 = \underline{\quad}$

$3 + 3 = \underline{\quad}$

$2 \times 3 = \underline{\quad}$

$5 + 5 = \underline{\quad}$

$2 \times 5 = \underline{\quad}$