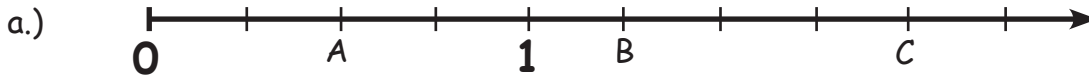
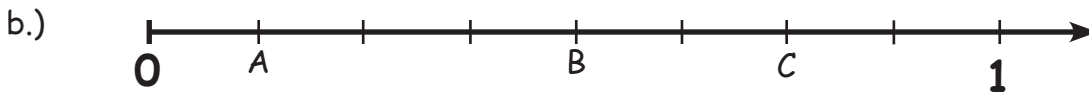


BRÜCHE AM ZAHLENSTRAHL

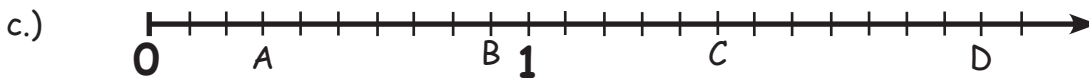
Welche Brüche sind am Zahlenstrahl markiert?



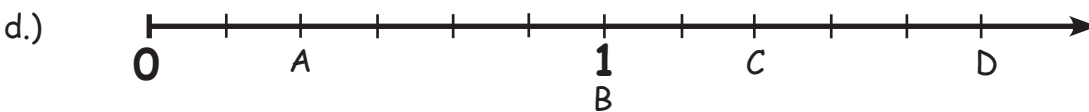
A = _____ B = _____ C = _____



A = _____ B = _____ C = _____



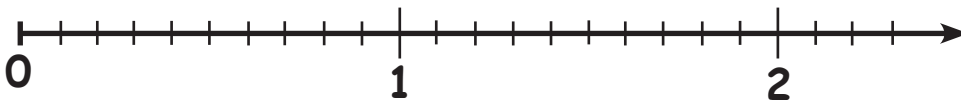
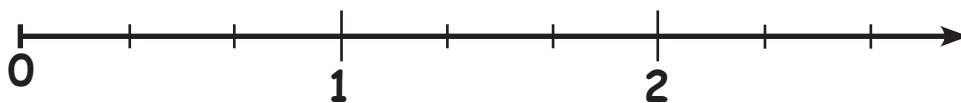
A = _____ B = _____ C = _____ D = _____



A = _____ B = _____ C = _____ D = _____

Wandle die folgenden Brüche am Zahlenstrahl in gemische Zahlen um!

Überlege dir zuerst, welchen Zahlenstrahl du verwenden musst!



a.) $\frac{4}{3}$ _____ b.) $\frac{12}{10}$ _____ c.) $\frac{8}{3}$ _____ d.) $\frac{18}{10}$ _____

e.) $\frac{20}{10}$ _____ f.) $\frac{7}{3}$ _____ g.) $\frac{23}{10}$ _____ h.) $\frac{3}{3}$ _____